

$$17 + 34$$
$$45 + 25$$
$$36 + 17$$

Name: _____

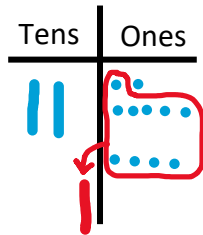
Date: _____

Double and Single-Digit Addition Part 2

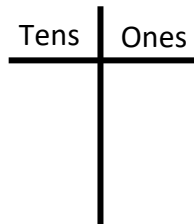
Use the T-chart to complete the following math problems:

Example:

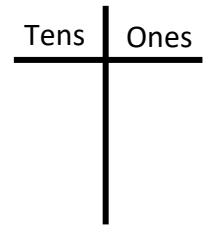
$$\begin{array}{r} 27 \\ + 4 \\ \hline 31 \end{array}$$



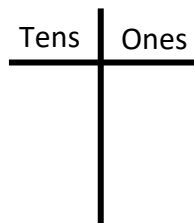
$$\begin{array}{r} 6 \\ + 28 \\ \hline \end{array}$$



$$\begin{array}{r} 3 \\ + 38 \\ \hline \end{array}$$



$$\begin{array}{r} 17 \\ + 4 \\ \hline \end{array}$$



$$\begin{array}{r} 26 \\ + 9 \\ \hline \end{array}$$

